




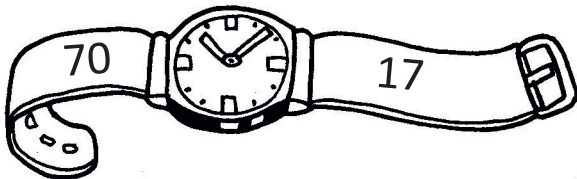






Ime in priimek:

Število točk:



Na paščkih ur so napisana števila. Dobro jih poglej in na vsakem paščku obkroži večje število. Nato vsa števila uredi od najmanjšega do največjega. Števila zapiši na spodnje črte.




---



---



---



---



Izračunaj. Poišči rezultate v likih in črke zapiši v okvirčke zraven računov. Dobil boš znan slovenski pregovor.

$42 + 3 = \underline{\hspace{2cm}}$

$48 - 6 = \underline{\hspace{2cm}}$

$67 - 2 = \underline{\hspace{2cm}}$

$44 + 5 = \underline{\hspace{2cm}}$

$17 + 2 = \underline{\hspace{2cm}}$

$21 + 6 = \underline{\hspace{2cm}}$

$68 - 4 = \underline{\hspace{2cm}}$

$59 - 6 = \underline{\hspace{2cm}}$

$36 + 2 = \underline{\hspace{2cm}}$

$56 - 4 = \underline{\hspace{2cm}}$

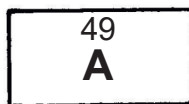
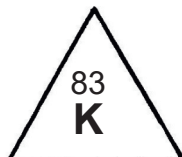
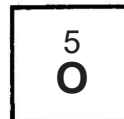
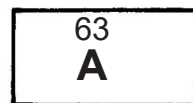
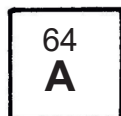
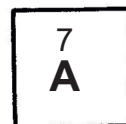
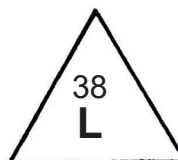
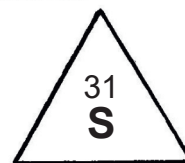
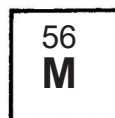
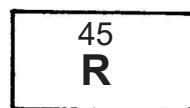
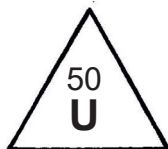

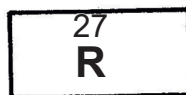
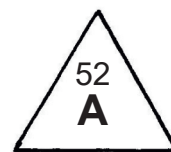

$22 + 7 = \underline{\hspace{2cm}}$

$70 - 7 = \underline{\hspace{2cm}}$

$48 + 2 = \underline{\hspace{2cm}}$

$7 + 6 = \underline{\hspace{2cm}}$

$12 - 5 = \underline{\hspace{2cm}}$



Pregovor: \_\_\_\_\_





Vstavi manjkajoči člen. Pobarvaj črke v poljih s pravilnimi rezultati.  
Črke, brane po vrsti, ti razkrijejo vrsto ure.

$36 - \square = 31$

$58 + \square = 60$

$61 + \square = 68$

$\square + 21 = 27$

$69 - \square = 66$

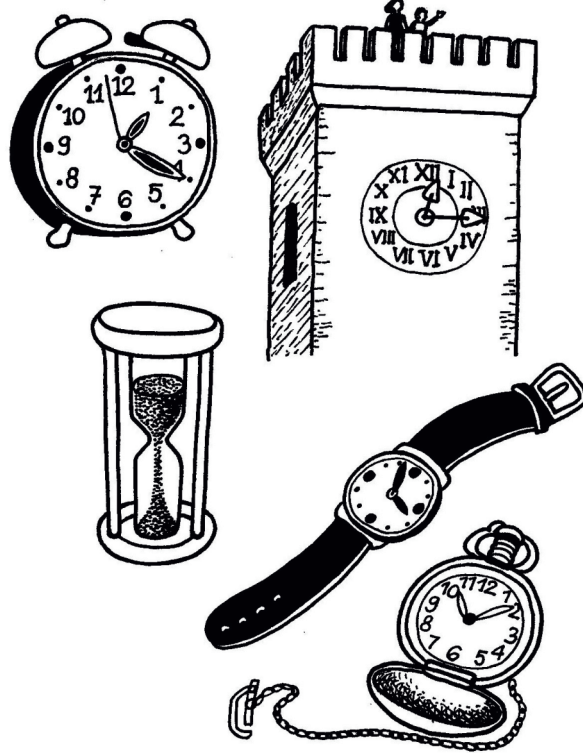
$38 - \square = 38$

$47 + \square = 48$

$\square + 66 = 70$

$59 - \square = 51$

$30 - \square = 21$



Č 15	P 5	T 51	E 7	O 17	L 71	Š 2
B 12	R 21	O 14	U 41	Ž 42	Č 4	P 19
D 91	I 20	E 9	E 16	N 1	L 62	A 6
Č 13	N 31	K 32	A 34	N 30	U 3	P 13
S 11	A 31	C 30	Č 18	R 8	D 81	A 0

Vrsta ure: \_\_\_\_\_





Reši besedilne naloge. Prave rezultate poišči pri budilkah spodaj in jih obkroži.

Na koncu dopolni še spodnje povedi.

A Pri urarju je bilo veliko ur. Imel je 51 različnih ročnih ur, 6 vrst budilk in 3 različne stenske ure. Koliko vrst ur je imel urar?

Račun: \_\_\_\_\_

Odgovor: \_\_\_\_\_



B Babica Rozi je svojim vnučkoma kupila uri. Opazila je tudi moško uro za dedka in je kupila še to. Koliko ur je ostalo urarju, ko je babica odšla, če jih je imel na začetku 27?

Račun: \_\_\_\_\_

Odgovor: \_\_\_\_\_




C Marko je varčeval za uro. Prihranil je 70 evrov. Ura, ki jo je želel kupiti stane 63 evrov. Ali ima Marko dovolj denarja?

Obkroži: da      ne

Če ima dovolj denarja, izračunaj koliko evrov mu bo še ostalo po nakupu ure.

Račun: \_\_\_\_\_

Odgovor: \_\_\_\_\_



Leto ima \_\_\_\_\_ mesecev. Dan ima \_\_\_\_\_ ur.

Teden ima \_\_\_\_\_ dni. Ura ima \_\_\_\_\_ minut.

